

Note:

- (1) All questions/activities are compulsory.
- (2) Figures to the right indicate full marks.
- (3) For Q. No. 4(A), use supplied outline map of India and tie it to your answer-book.
- (4) For Q. No. 6(A), use the graph paper supplied to you and attach it to the main answer-book.
- (5) Draw neat diagrams and sketches wherever necessary.
- (6) Use of stencil is allowed for drawing maps.
- (7) Use only blue or black ink pen for writing answers. Answers written in pencil will not be considered.
- (8) Pencil and colour pencil can be used for diagrams, sketches, graphs and maps.

Q.1. Complete the following sentences by choosing the appropriate alternatives from those given and rewrite the sentences in your answer-book. [4]

- (1) Like Brazil, India too has _____.
 - (i) high mountains
 - (ii) ancient plateau
 - (iii) west-flowing rivers
 - (iv) snow-capped mountains
- (2) In the mixed forests at the foothills of Himalayas, _____ trees are found in plenty.
 - (i) sal
 - (ii) sundar
 - (iii) khejri
 - (iv) teak
- (3) In Brazil, _____, a south-west flowing river, is used for waterways.
 - (i) Puraguaco
 - (ii) Parnaiba
 - (iii) Purus
 - (iv) Parana
- (4) In Narmada valley, _____ type of settlements are found.
 - (i) linear
 - (ii) dispersed
 - (iii) nucleated
 - (iv) star-shaped

Q.2. Match the following.**[4]**

'A'	'B'
(1) Field visit	(i) Sao Paulo
(2) Climate of India	(ii) Samba dance
(3) Brazil	(iii) Monsoon type
(4) Densely populated state in Brazil	(iv) Teak
	(v) Follow the instructions of the teacher

Q.3. Write short notes. (Any two)**[4]**

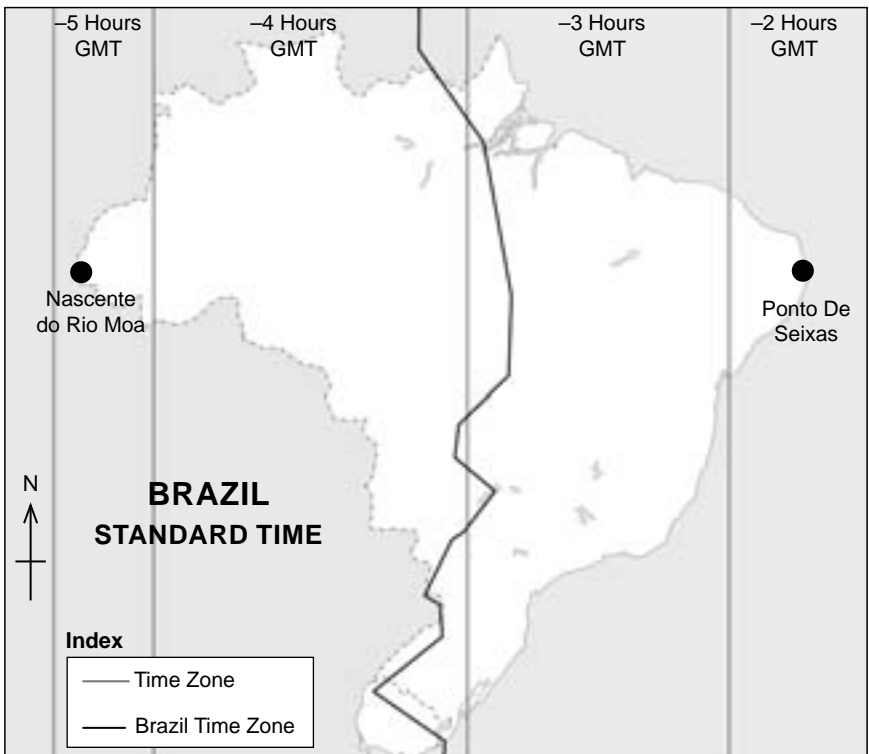
- (1) Development of communication in Brazil
- (2) Western coastal plain
- (3) Historical background of Brazil

Q.4. (A) Mark the following in the outline map of India supplied to you, write the names and give index. (Any four)**[4]**

- (1) Tropic of Cancer
- (2) Kaveri River
- (3) Andaman and Nicobar Islands
- (4) State with highest sex ratio
- (5) Northernmost state with least density of population
- (6) Lake Chilka

(B) Observe the given map and answer the following questions. (Any four)**[4]****Questions:**

- (1) What does the below map indicate?
- (2) How many time zones are shown in the map?
- (3) Which part of Brazil is ahead of others?
- (4) What does the dark line in the map show?
- (5) In which direction does Ponto De Seixas lie?



Q.5. Give geographical reasons for the following. (Any two) [6]

- (1) There are few natural ports on the eastern coast of India.
- (2) Tropical cyclones occur rarely in Brazil.
- (3) Urbanization is increasing rapidly in India.
- (4) Rain forests in Brazil are called 'Lungs of the World'.

Q.6. (A) With the help of given statistical data, prepare a simple bar graph and answer the following questions. [6]

**India – Trade (% of GDP)
(1980 to 2016)**

Year	1980	1990	2000	2010	2016
Percentage of GDP	15	16	28	50	40

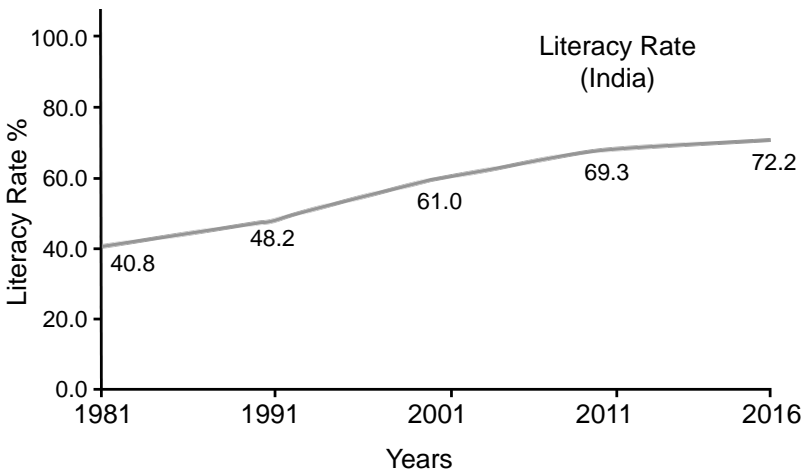
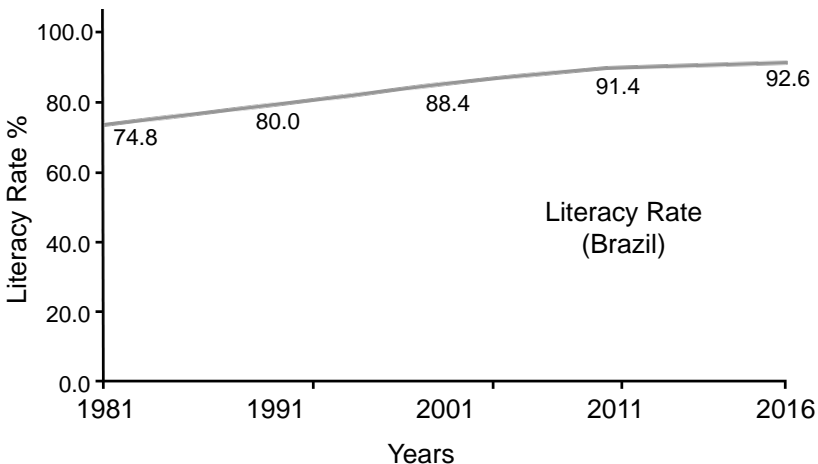
Questions:

- (1) What does the graph show?
- (2) What was the contribution of trade to the GDP in the year 2010?
- (3) How much was the decrease in the percentage of GDP in the period from 2010 to 2016?

Or

(B) Observe the following graph and answer the given questions. [6]

LITERACY RATE:



Questions:

- (1) What does the above graph indicate?
- (2) Which country has a high literacy rate?
- (3) In the year 2001, how much more is the literacy rate in Brazil than in India?
- (4) What is the highest literacy rate in India?
- (5) Which decade in India shows the highest increase in literacy rate?
- (6) How much is the literacy rate in Brazil in the year 2011?

Q.7. Answer the following questions in detail. (Any two) [8]

- (1) Prepare a questionnaire for an interview with a farmer during the field visit.
- (2) Differentiate between the human settlements in the Ganga river basin and the Amazon river basin.
- (3) State the major forests types in India and explain thorny and shrub-type vegetation.

★★★